

ESCOLA: \_\_\_\_\_

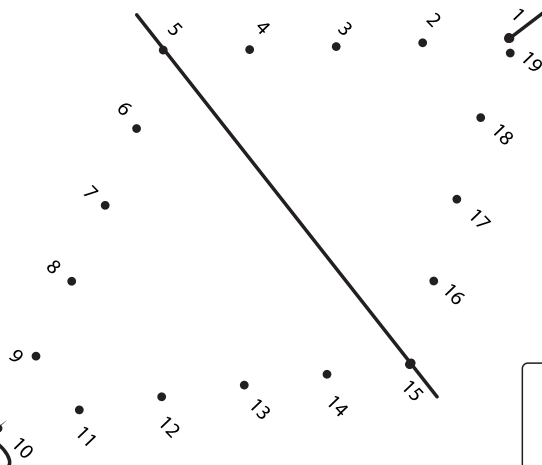
NOME: \_\_\_\_\_

PROFESSOR: \_\_\_\_\_ DATA: \_\_\_ / \_\_\_ / \_\_\_\_\_



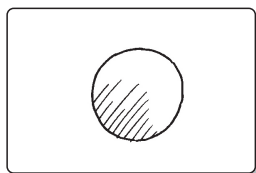
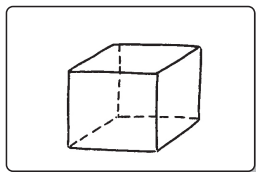
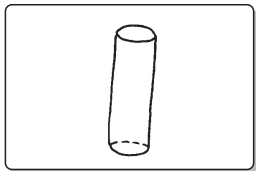
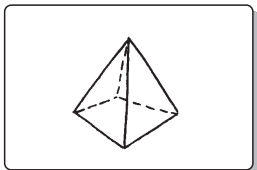
## FORMAS GEOMÉTRICAS

1 - LIGUE OS PONTOS E FORME O DESENHO.



QUAL É A FORMA GEOMÉTRICA DO DESENHO  
QUE VOCÊ FORMOU? \_\_\_\_\_

2 - LIGUE CORRETAMENTE.



CILINDRO

CUBO

ESFERA

PIRÂMIDE

